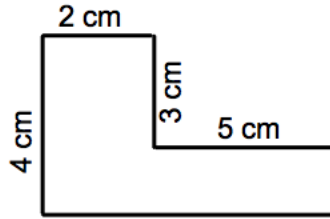


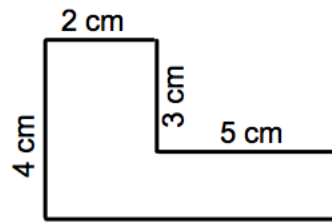
Area of an L-Shaped Figure

Sam wants to plant flowers around his house. He needs to figure out the total area he has to work with first.



1) Make sure you know the measurements of each _____

Highlight all the horizontal lines one color and all the vertical lines another color.

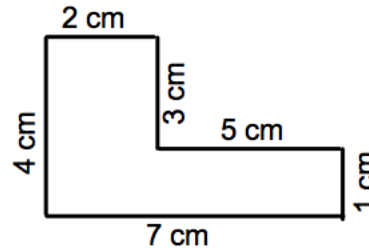


2) _____ the L-Shaped figure.

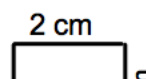
3) Figure out the area of each shape.

Formula: $L \times W = A$

Hint: Don't choose a broken side.



4) _____ the two areas together.



Practice -

