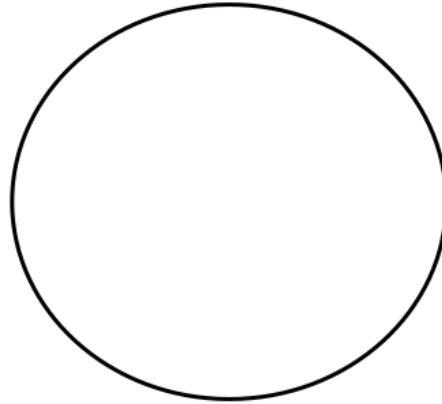
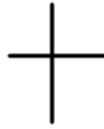


Latitude & Longitude


Line of Latitudes - Lines on a _____ or _____ that run _____ or _____. They are also called parallels.




Measure - Lines are measured by degrees _____ or _____ of the _____. Think horizontal lines :)

N = North

S = South



Lines of Longitude - Lines on a map or globe that run _____ and _____. These lines are also known as meridians. They ALL start or end at the _____.



Measure - Lines are measured in degrees based on the distance from the _____ meridian. Think vertical lines.

W = West

E = East

