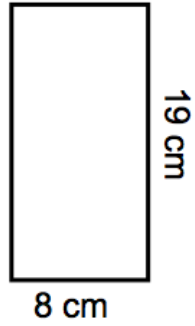
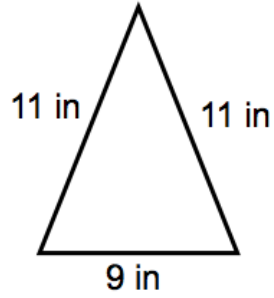


Name: _____ Number: _____ Date: _____

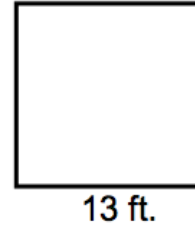
1. Find the perimeter



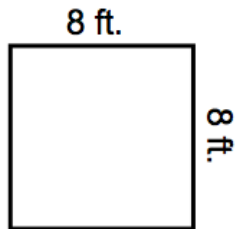
2. Find the perimeter



3. Find the perimeter



4. Find the perimeter



5. Find the perimeter

