

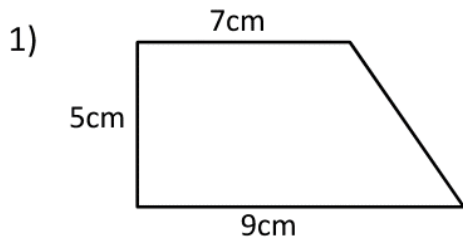
Name _____

Date _____

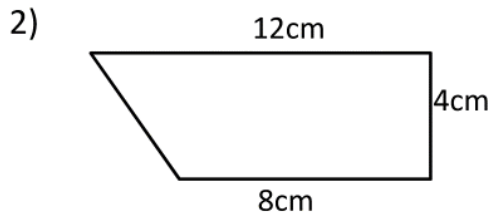


TRAPEZOID AREA SHEET 2

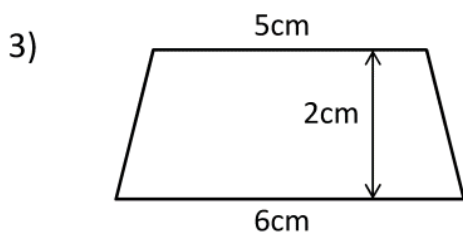
Find the area of these trapezoids. They are not drawn to scale.



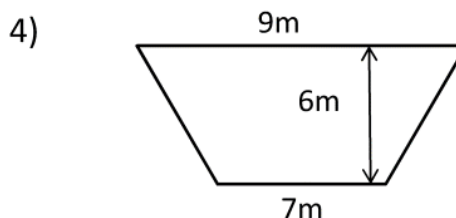
Area = _____ cm²



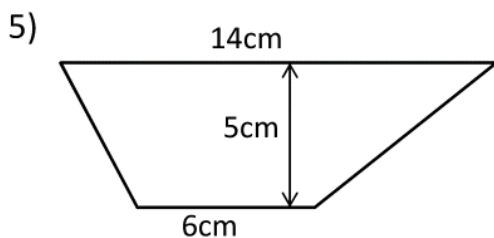
Area = _____ cm²



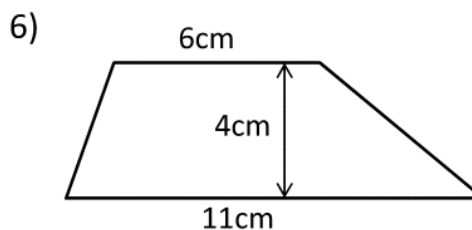
Area = _____ cm²



Area = _____ m²



Area = _____ cm²



Area = _____ cm²

Handy hint:

The formula for the area of a trapezoid is

$\frac{1}{2} \times (\text{length1} + \text{length2}) \times \text{height}$

