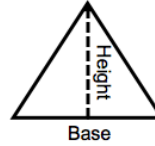
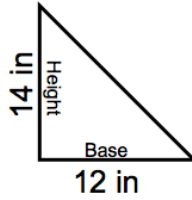


Area of a Triangle

Method 1: Follow the formula

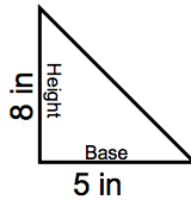
$$\frac{1}{2} b \times h = A$$

- 1) _____ the base by _____ or _____ the base in half
- 2) _____ the two numbers



Method 2:

- 1) _____ the base times the height
- 2) _____ the product by 2



Practice

