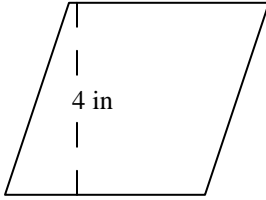


Name _____

AREA OF A PARALLELOGRAM #1

Directions: Find the area of parallelogram. The formula to calculate the area of a parallelogram is $Area = the\ width\ of\ the\ base \times the\ vertical\ height$. Write your answer in the space provided

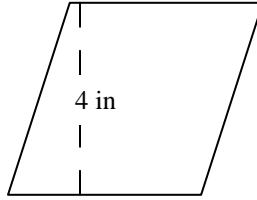
1)



10 in

Area _____

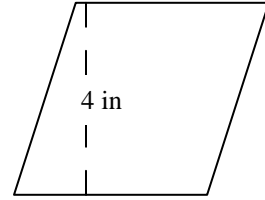
2)



8 in

Area _____

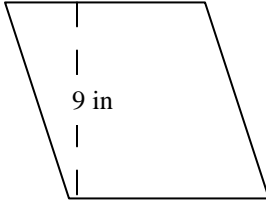
3)



6 in

Area _____

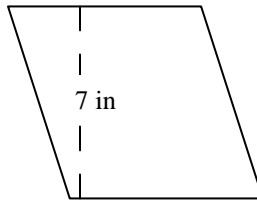
4)



5 in

Area _____

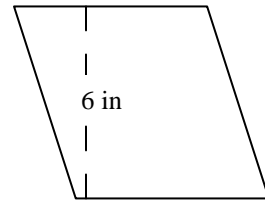
5)



8 in

Area _____

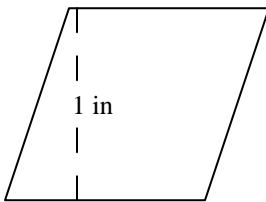
6)



9 in

Area _____

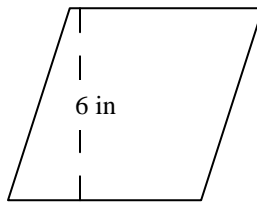
7)



8 in

Area _____

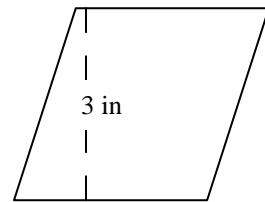
8)



2 in

Area _____

9)



6 in

Area _____