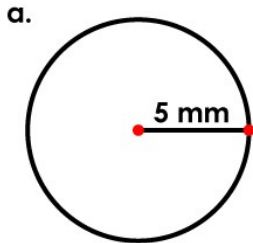


Name: _____

Calculating the Radius and Diameter of a Circle

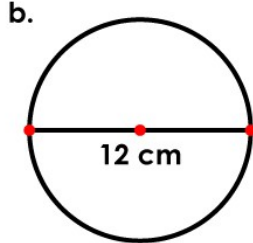
Radius and Diameter

What is the radius and diameter of each circle?



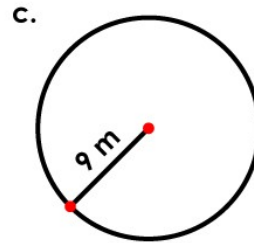
radius = _____

diameter = _____



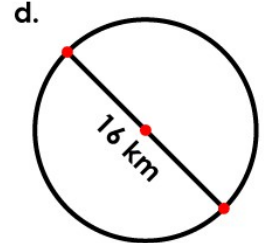
radius = _____

diameter = _____



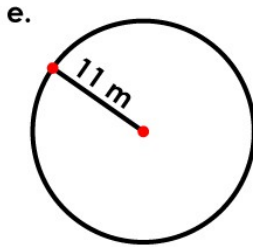
radius = _____

diameter = _____



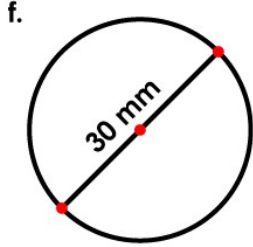
radius = _____

diameter = _____



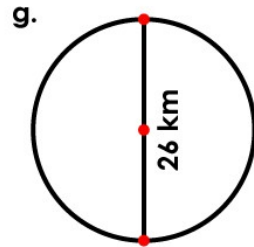
radius = _____

diameter = _____



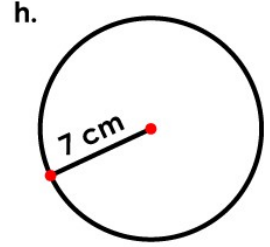
radius = _____

diameter = _____



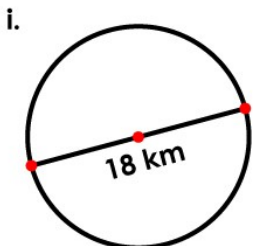
radius = _____

diameter = _____



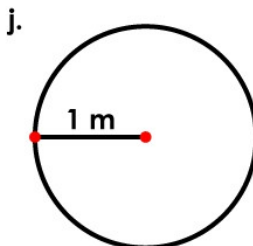
radius = _____

diameter = _____



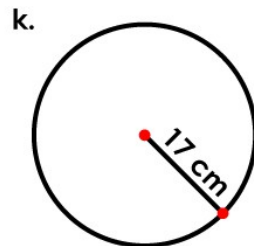
radius = _____

diameter = _____



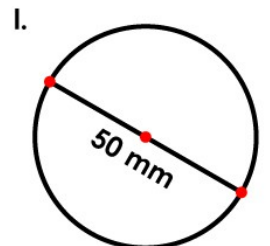
radius = _____

diameter = _____



radius = _____

diameter = _____



radius = _____

diameter = _____

m. John has a round swimming pool. The distance from the center of the pool to the edge is 3 meters. What is the diameter of John's pool?

answer: _____