

Faces, Edges & Vertices

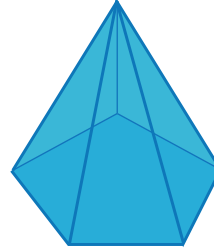
Write the name of each shape. Also, find the number of faces, edges and vertices.

1)

Faces Edges Vertices

Name: _____

2)

Faces Edges Vertices

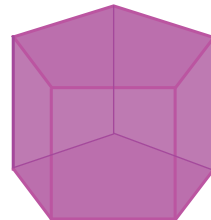
Name: _____

3)

Faces Edges Vertices

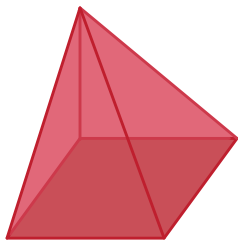
Name: _____

4)

Faces Edges Vertices

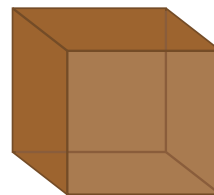
Name: _____

5)

Faces Edges Vertices

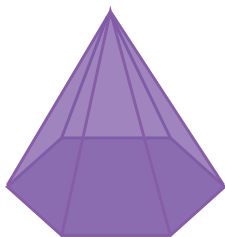
Name: _____

6)

Faces Edges Vertices

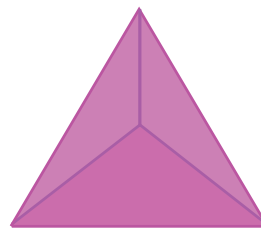
Name: _____

7)

Faces Edges Vertices

Name: _____

8)

Faces Edges Vertices

Name: _____