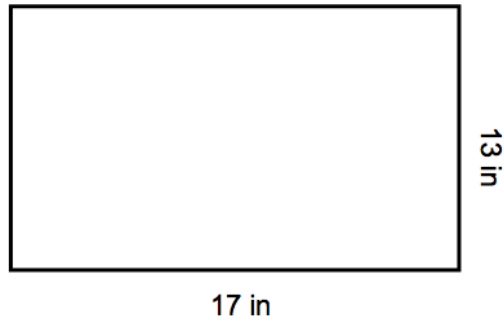
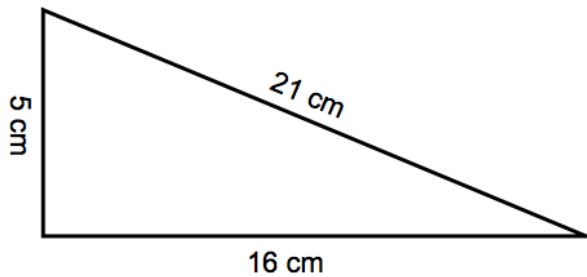


## Homework For 2/15/17

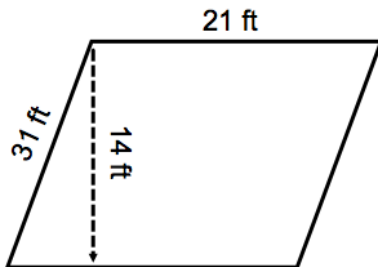
1) Solve the area and the perimeter.



2) Solve the area and the perimeter.



3) Solve the area.



4) Lacey is learning to drive, so this weekend she practiced driving  $\frac{1}{6}$  of a mile with her mother and another  $\frac{1}{4}$  of a mile with her father. How far did she drive altogether?

5) Billy began his pizza delivery route with  $\frac{2}{5}$  of a tank of gas in his car. When he made it back to the pizzeria,  $\frac{1}{4}$  of a tank of gas was left. How much gas did Wayne use?

6) Find the Volume

