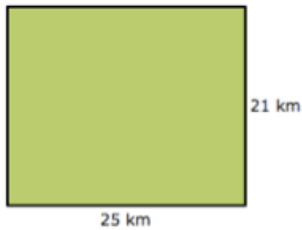


Directions: Find the area of each figure.
Remember, show your work two ways.

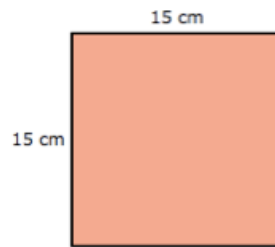
Formula - $L \times W = A$

What is the area?



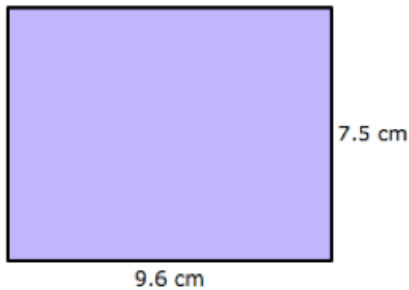
square kilometers

What is the area?



square centimeters

What is the area?



square centimeters

Write $\frac{39}{100}$ as a decimal number.

What is 2 to the fifth power?

Write **four hundred ninety-one thousandths** as a decimal number.

Which of the following is equivalent to $2 \times 2 \times 2 \times 2 \times 2 \times 2 \times 2$?

7^2

2^7

Write **seventy-four hundredths** as a decimal number.