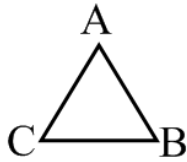


Lesson 61: Using Letter Points to Name a Figure


We can use _____ to name a figure.

The figure can be named in _____ different ways.




1) _____ a small shape of the figure.

2) Start at one _____ (where two line segments come _____) and move around the _____ until all the vertices are _____.




Naming parts on the figure - Every polygon will have line segments and _____.



Writing an angle - There are _____ common ways.

You can just name the vertex point with the angle or name the angle in the _____ of three points.



Practice - Letters A - I on page 390.