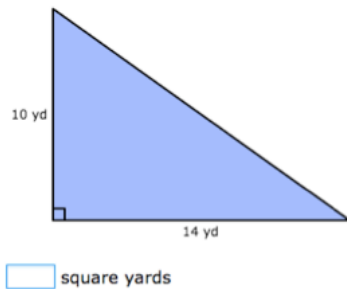


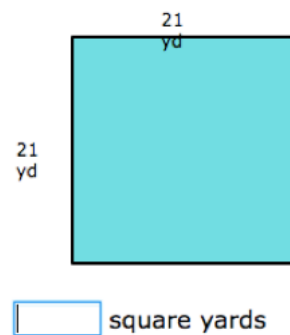
1) Complete the table:

pounds	2	<input type="text"/>	<input type="text"/>	10
ounces	<input type="text"/>	96	112	<input type="text"/>

2) What is the area?

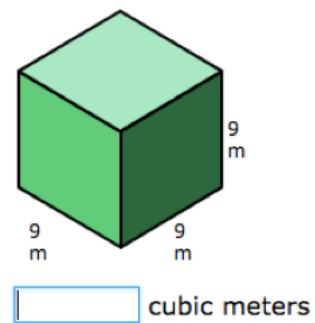


3) What is the area?



4) It takes Regan 9.3 minutes to wash a car. How long will it take her to wash 14 cars?

5) What is the volume?



6) Write 0.023 as a fraction.