

Name : _____

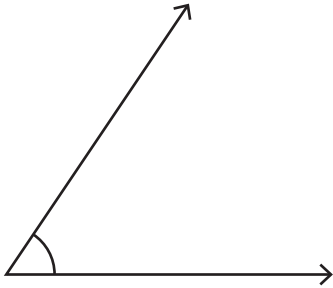
Score : _____

Measuring Angles

Moderate: S1

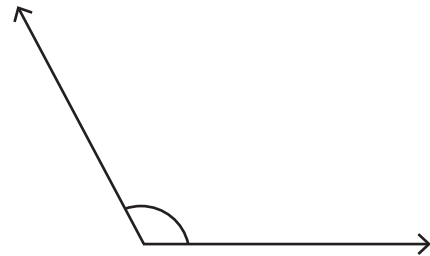
Measure each angle using protractor.

1)



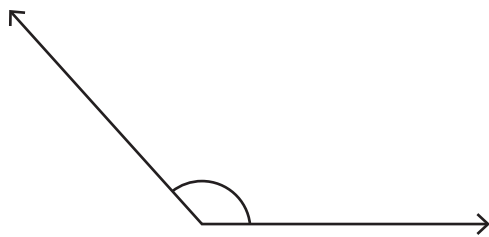
Angle : _____

2)



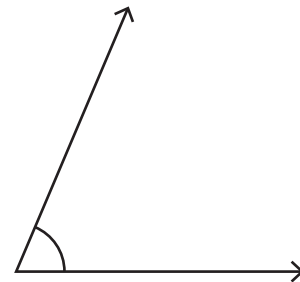
Angle : _____

3)



Angle : _____

4)



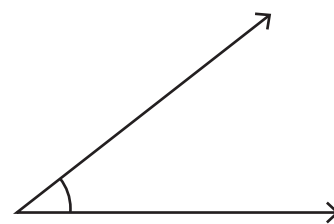
Angle : _____

5)



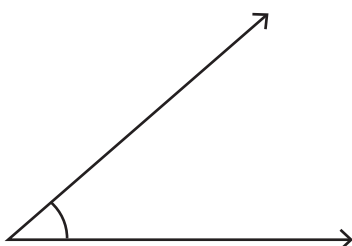
Angle : _____

6)



Angle : _____

7)



Angle : _____

8)



Angle : _____