

Name : \_\_\_\_\_

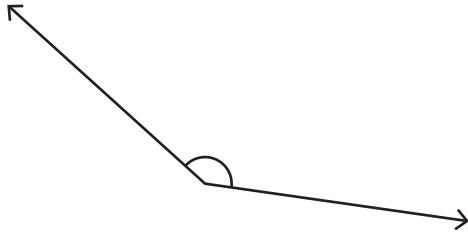
Score : \_\_\_\_\_

## Measuring Angles

Difficult: S2

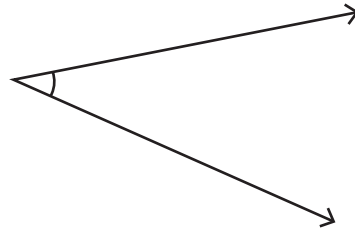
Measure each angle using protractor.

1)



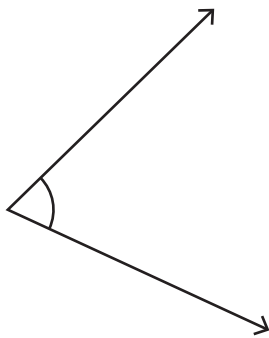
Angle : \_\_\_\_\_

2)



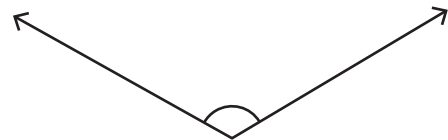
Angle : \_\_\_\_\_

3)




Angle : \_\_\_\_\_

4)



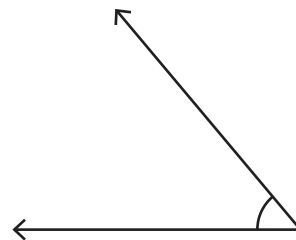
Angle : \_\_\_\_\_

5)



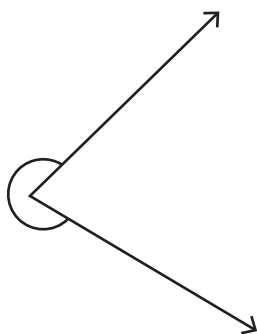
Angle : \_\_\_\_\_

6)



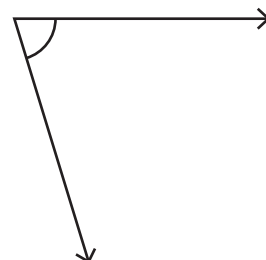
Angle : \_\_\_\_\_

7)



Angle : \_\_\_\_\_

8)



Angle : \_\_\_\_\_

Name : \_\_\_\_\_

## Answer Key

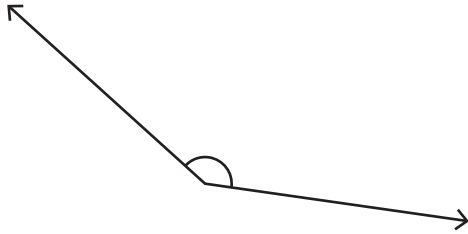
Score : \_\_\_\_\_

### Measuring Angles

Difficult: S2

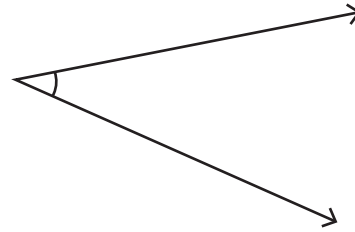
Measure each angle using protractor.

1)



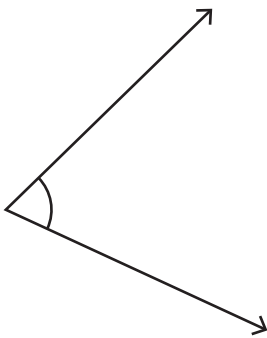
Angle : 146°

2)



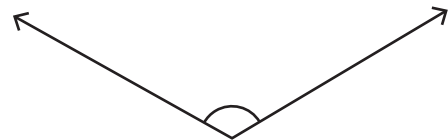
Angle : 35°

3)




Angle : 69°

4)



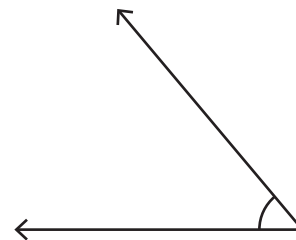
Angle : 120°

5)



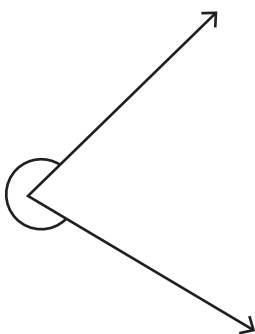
Angle : 166°

6)



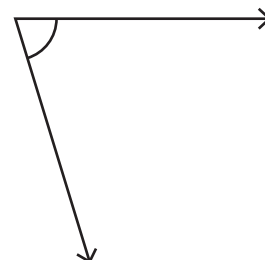
Angle : 50°

7)



Angle : 285°

8)



Angle : 73°