
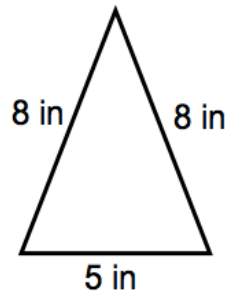


Perimeter Homework

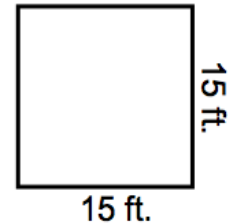
1. Find the perimeter



2. Find the perimeter



3. Find the perimeter



4. Show "25 divided by 5" in three different forms.

5. Compare: $\frac{42}{7}$ ○ $\frac{48}{6}$

6. $4g = 28$

7. $5g = 4 \times 10$

8. $6 \times 3 \times 10 = ?$

9. Sean was the fourth person in line to see the new Star Wars movie. His buddy, Reeze, was the ninth person in line. How many people are between Sean and Reeze?

10. Lilly, Kaprice, and Faith all went shoe shopping recently. Lilly spent \$40, Kaprice spent \$52, and Faith spent more than both girls. If the total amount spent by the girls was \$300, how much money did Faith spend at the shoe store? Write an EQUATION for this problem and find the answer.

11. Holly opened a bottle containing 22 ounces of milk and poured 8 ounces of milk into a bowl of Lucky Charms cereal. How many ounces of milk REMAINED in the bottle. Write an EQUATION for this problem and find the answer.

12. Draw an oblique, vertical and horizontal line. LABEL each one.

13. $5000 = f + 1,345$

14. Write \$5,298.35 in word form.

15. The school recently ordered 5 boxes of books. There were 13 books in each box. How many books were there in all 5 boxes?