


Name : _____


Score : _____

Counting Cubes

Count the cubes and find the volume of each rectangular prism.


 = 1 cm³

1)



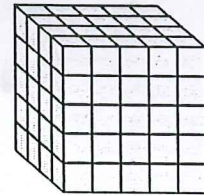
Volume = _____

2)



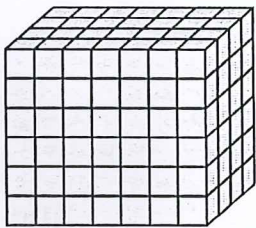
Volume = _____

3)




Volume = _____

4)




Volume = _____

5)




Volume = _____

6)



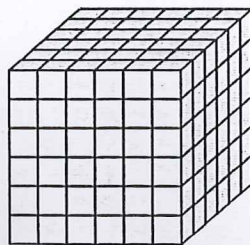
Volume = _____

7)

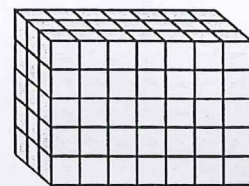


Volume = _____

8)



9)



Volume = _____