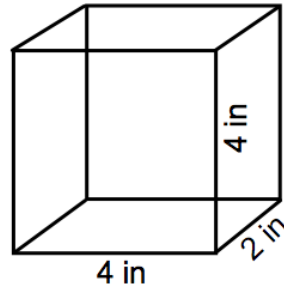


## Volume of a Figure

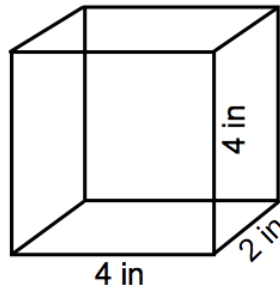
1) Follow the formula

Length x Width x Height

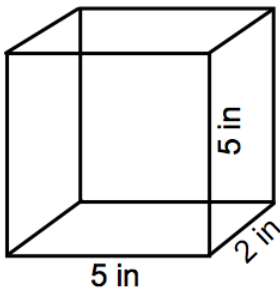
$L \times W \times H$



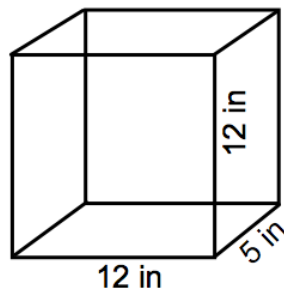
2) Make sure that you multiply only \_\_\_\_ numbers at a time.



Practice -



Practice -



$$\frac{15}{25}$$

$$\frac{18}{27}$$