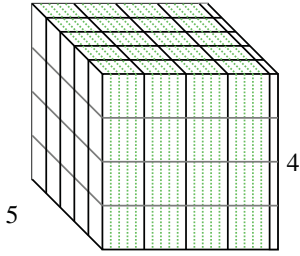




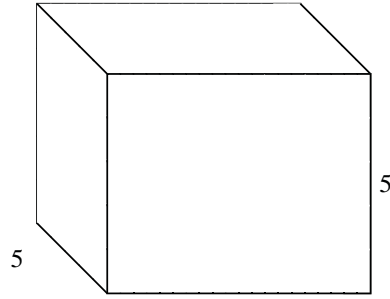
Fill each rectangular prism with cubes to determine the volume. Each prism's unit is measured in cm (not to scale).

Answers

Ex)  $4 \frac{1}{5}$



1)  $6 \frac{2}{3}$



Ex. 84 cm<sup>3</sup>

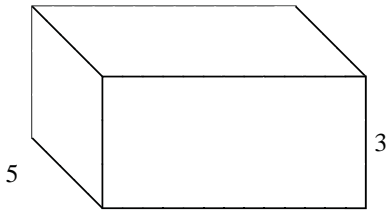
1. \_\_\_\_\_

2. \_\_\_\_\_

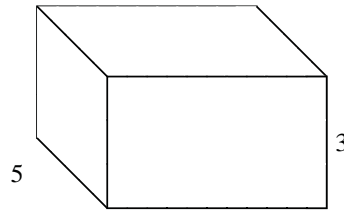
3. \_\_\_\_\_

4. \_\_\_\_\_

2)  $6 \frac{1}{2}$



3)  $5 \frac{1}{2}$




5. \_\_\_\_\_

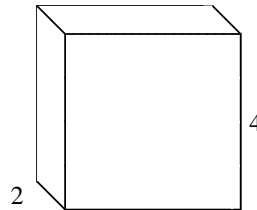
6. \_\_\_\_\_

7. \_\_\_\_\_

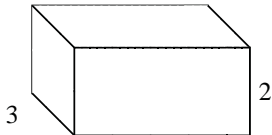
4)  $6 \frac{1}{5}$



5)  $4 \frac{1}{5}$



6)  $4 \frac{3}{5}$



7)  $5 \frac{1}{4}$

