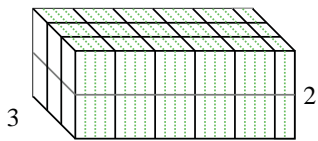


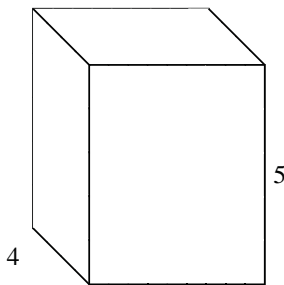


Fill each rectangular prism with cubes to determine the volume. Each prisms unit is measured in cm (not to scale).

Ex) $5 \frac{2}{4}$



1) $4 \frac{1}{2}$



Answers

Ex. **33 cm³**

1. _____

2. _____

3. _____

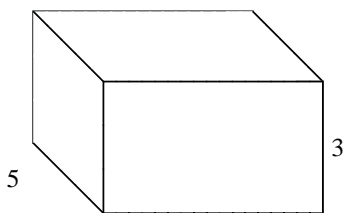
4. _____

5. _____

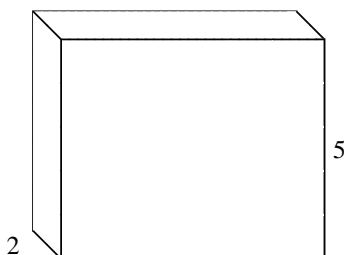
6. _____

7. _____

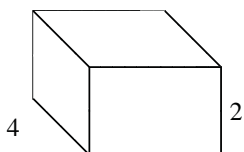
2) $5 \frac{2}{3}$



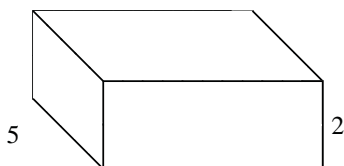
3) $6 \frac{1}{5}$



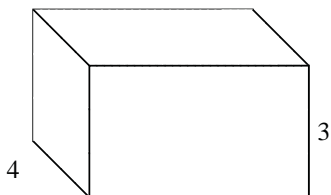
4) $3 \frac{2}{3}$



5) $5 \frac{1}{2}$



6) $5 \frac{4}{5}$



7) $5 \frac{1}{4}$

